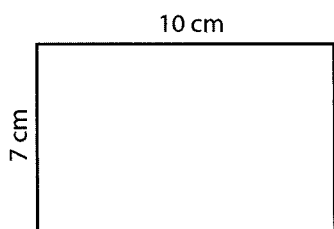


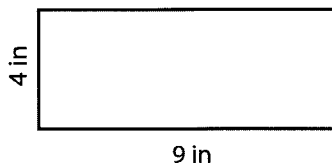
### Rectangle-Area

Find the area of each rectangle. Use the formula for area:  $A = l \times w$

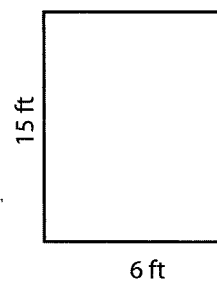
1)

Area = 

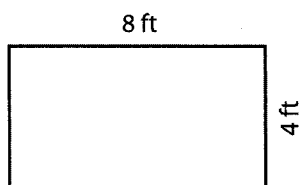
2)

Area = 

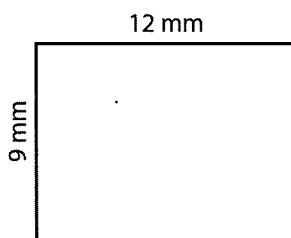
3)

Area = 

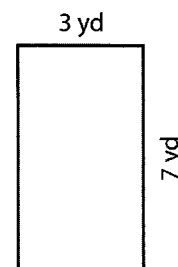
4)

Area = 

5)

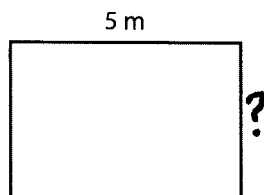
Area = 

6)


Area = 

Problems 7-9: Find the missing side using the Area formula:  $A = l \times w$


7)

Area = 

8)

Area = 

9)

Area =