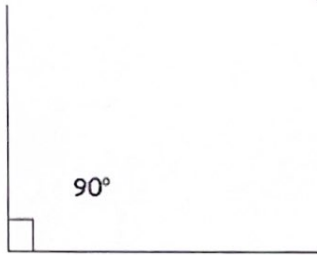


Name _____
"Make learning child's play"

Measuring Angles

Use a protractor to measure these angles. Write the answer next to the angle.



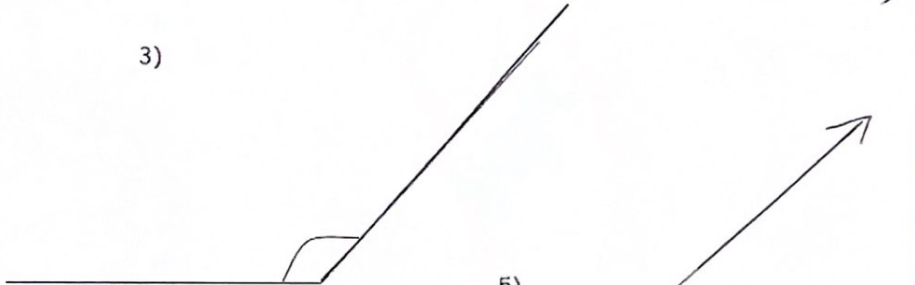
1)



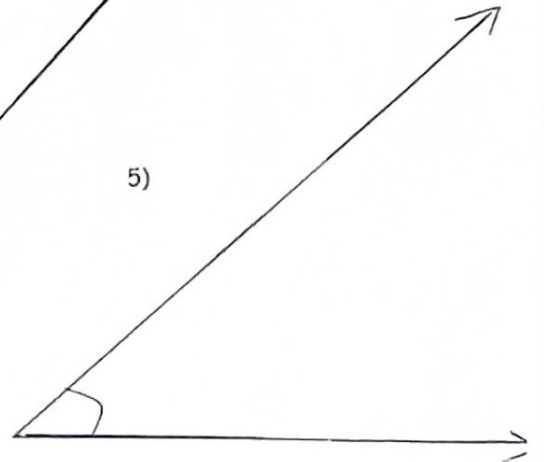
2)



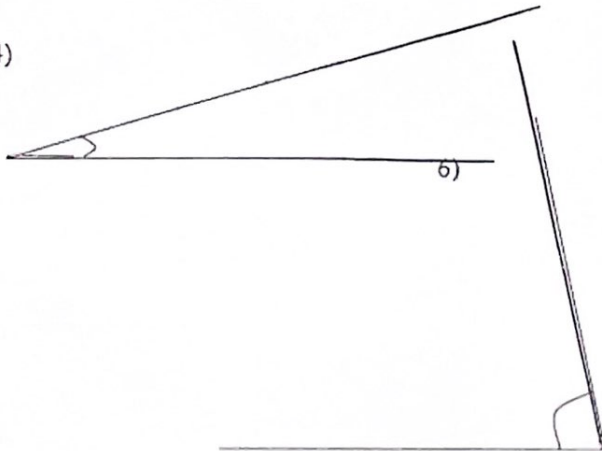
3)



5)



4)



6)

7)



Constructing Angles | 5° Increments

Draw each angle using a protractor.

1) 140°

2) 20°



3) 45°

4) 110°



5) 60°

6) 155°



7) 95°

8) 125°

